



## GUÍA 2 MATEMÁTICA 5° BÁSICO ABRIL 2021

NOMBRE: \_\_\_\_\_ CURSO: \_\_\_\_\_ FECHA: \_\_\_\_\_


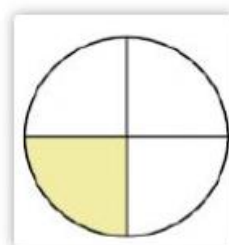
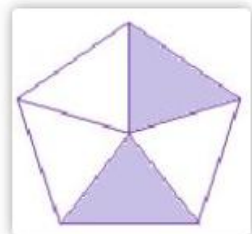


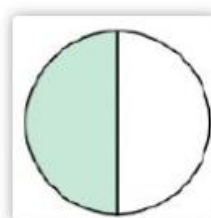


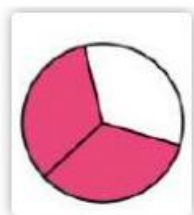
**OBJETIVO:** Escribir fracciones según una representación gráfica dada

Representar gráficamente fracciones propias

**CONTENIDOS:** Fracciones

**ACTIVIDADES:**

1.- Escribe debajo de cada imagen, que fracción representa







2.- Grafica las siguientes fracciones

**RECUERDA QUE EL ENTERO SE DIVIDE EN PARTES IGUALES**


$$\frac{4}{6}$$




$$\frac{4}{9}$$




$$\frac{2}{5}$$



$$\frac{1}{2}$$



$$\frac{2}{3}$$



$$\frac{1}{4}$$